



Topic	Question Text	Answers	Image
General questions	Is reversing in a one-way street permitted?	<p>Yes, but this must be done on the same side of the road or lane where you drove on before reversing.</p> <p>Yes, if the other road users are not impeded.</p> <p>No.</p>	
General questions	At intersection drivers must take their corner.....	<p>Wide to the right and sharp to the left.</p> <p>To the right with care and to the left as wide as possible.</p> <p>Sharp to the right and wide to the left.</p>	

Topic	Question Text	Answers	Image
General questions	When the load of a vehicle projects to the rear, the driver must.....	<p>fit a red flag during daytime, and at night a red lantern on the end of the load.</p> <p>fit a red flag during daytime, and at night no measures are required.</p> <p>fit a red flag during daytime, and at night he/ she must not drive with that load.</p>	
General questions	The signals given by a police officer on duty must be obeyed by:	<p>All drivers.</p> <p>All road users.</p> <p>All drivers of vehicles.</p>	
General questions	Which documents must you carry when driving	Only proof of a valid vehicle insurance and valid vehicle inspection.	

Topic	Question Text	Answers	Image
	or riding a motor vehicle?	<p>Only a valid driving license and valid vehicle inspection.</p> <p>Proof of a valid vehicle insurance; valid driving license; valid vehicle inspection; receipt of road tax valid for current year.</p>	
General questions	When must you turn your lights on?	<p>From sunrise to sunset.</p> <p>From sunset to sunrise.</p> <p>Only when it is dark at night.</p>	
General questions	What legal requirements must the horn of a vehicle meet?	<p>The horn must emit a low-pitched tone.</p> <p>The horn must emit a single-pitched tone.</p> <p>The horn must emit a high-pitched tone.</p>	
General questions	Is driving with only one hand on the steering wheel allowed?	<p>Yes, drivers must always drive with only one hand on the steering wheel.</p> <p>Yes, drivers must have at least one hand on the steering wheel.</p> <p>No, drivers must always have two hands on the steering wheel.</p>	

Topic	Question Text	Answers	Image
General questions	Which part(s) of the road must the drivers of motor vehicles, from their seat be able to see with the aid of a mirrors?	<p>The parts of the road, on the left and right sides of their vehicles.</p> <p>The road to the vehicles rear.</p> <p>The road on the left, right and rear of their vehicles.</p>	
General questions	May you give a signal to warn that you want to overtake?	<p>Yes, but only an audible warning signal during daytime and a visual warning signal at night.</p> <p>Yes, but only an audible warning signal during daytime and at night.</p> <p>Yes, but only an audible warning signal during daytime.</p>	


Topic	Question Text	Answers	Image
General questions	Is the motorcycle allowed to overtake another motorcycle here?	Yes. No.	


Topic	Question Text	Answers	Image
General questions	Is the motorcycle allowed to overtake the car here?	Yes. No.	

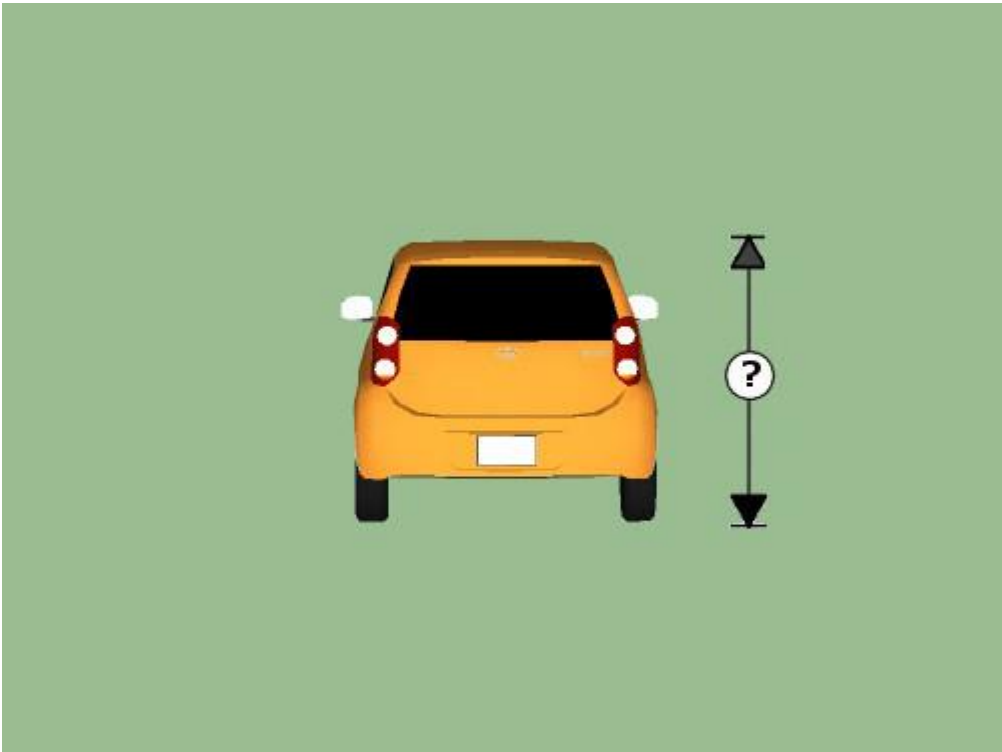
Topic	Question Text	Answers	Image
General questions	Is the car allowed to overtake the motorcycle here?	Yes. No.	

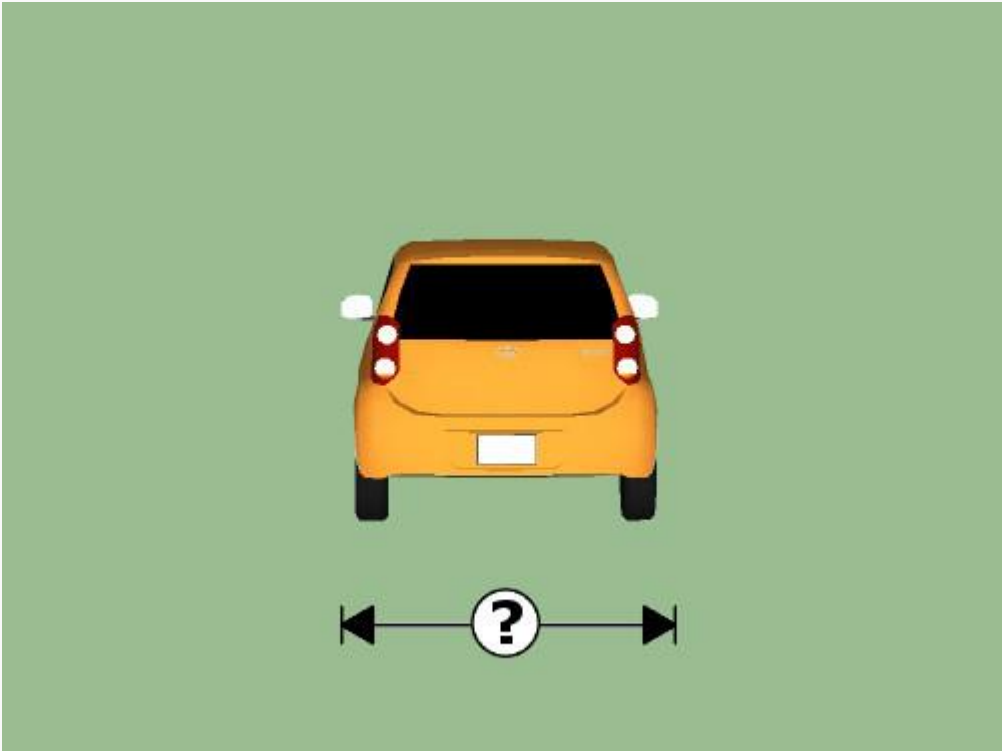
Topic	Question Text	Answers	Image
General questions	Is it permitted to stop on the bridge for a moment to ask for directions?	Yes. No.	 A 3D rendered image of a white car with a blue and white 'STUDENT' sign on its roof. The car is parked on a paved bridge with a decorative metal railing and stone pillars. A person with blonde hair, wearing a grey shirt and black pants, is standing next to the driver's side door, looking at a phone. The license plate area of the car reads 'St. Martin'. In the background, there is a green building and a street lamp.

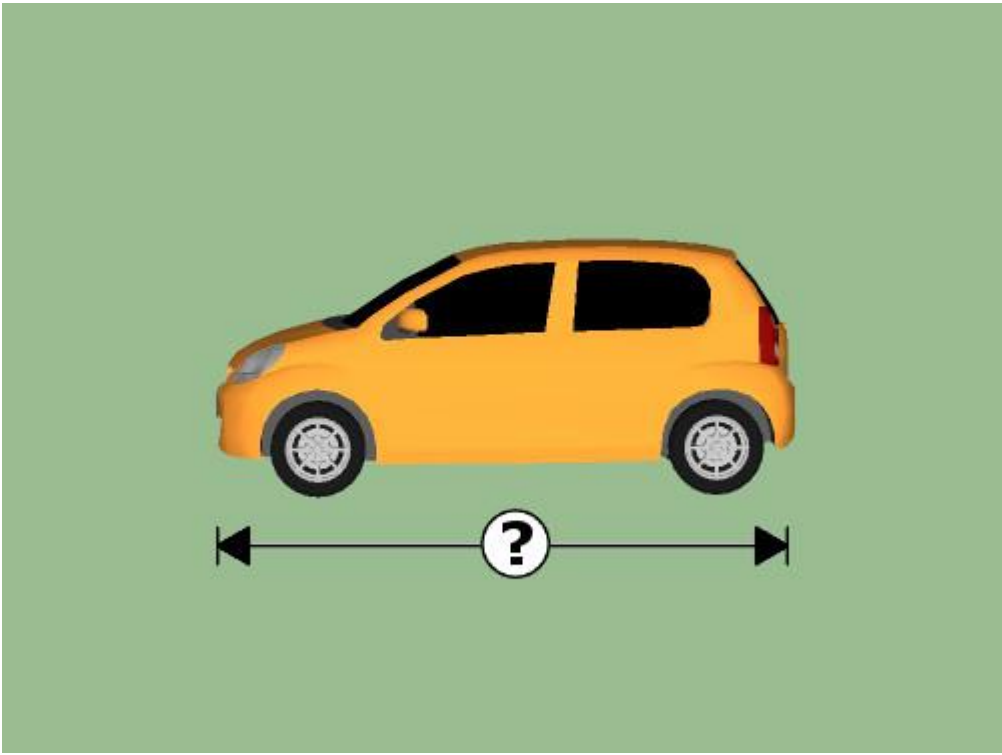
Topic	Question Text	Answers	Image
General questions	How is this road user classified?	<p>As a driver.</p> <p>As a pedestrian.</p> <p>As a motor vehicle driver.</p>	 An illustration of a person with dark hair, wearing a grey long-sleeved shirt and blue pants, pushing a blue baby stroller. The stroller has a white frame and black wheels. The person is standing behind the stroller, holding the handlebars. The stroller is facing left.


Topic	Question Text	Answers	Image
General questions	How is this road user classified?	<p>As a driver.</p> <p>As a pedestrian.</p> <p>As a motor vehicle driver.</p>	 A photograph of a woman with blonde hair, wearing a black and white striped tank top and black pants, walking a large black and white spotted dog on a leash. The woman is walking towards the right, and the dog is walking towards the left. The background is plain white.


Topic	Question Text	Answers	Image
General questions	How is this road user classified?	<p>As a driver.</p> <p>As a pedestrian.</p> <p>As a motor vehicle driver.</p>	


Topic	Question Text	Answers	Image
General questions	What is the maximum height in centimeters that a car may have? (Answers are with figures only, like 350, or 300, or 250.)	350	 A diagram showing the rear view of a yellow car. To the right of the car, there is a vertical dimension line with arrows at both ends. In the center of this dimension line is a white circle containing a black question mark. The background is a solid green color.

Topic	Question Text	Answers	Image
General questions	What is the maximum width in centimeters that a car may have? (Answers are with figures only, like 250, or 300, or 350.)	250	 A top-down view of a yellow car centered on a green background. Below the car, a horizontal double-headed arrow spans the width of the car, with a white circle containing a black question mark in the center of the arrow.

Topic	Question Text	Answers	Image
General questions	What is the maximum length in meters that a car may have? (Answers are with figures only, like 11, or 14, or 10.)	10	 A yellow hatchback car is shown in profile against a green background. Below the car, a horizontal dimension line with arrows at both ends spans the length of the vehicle. In the center of this dimension line is a white circle containing a black question mark, indicating that the length of the car is the subject of the question.

Topic	Question Text	Answers	Image
General questions	Is the car allowed to overtake a motor bike here?	Yes. No.	 A photograph of a white car with a blue 'L STUDENT' sign on its roof and a red motorcycle on a bridge. The car is in the foreground, and the motorcycle is further ahead on the bridge. The bridge has a metal truss structure and a wooden deck. The license plate of the car reads 'St. Maarten'.

Topic	Question Text	Answers	Image
General questions	What is the validity of the Personal Declaration after applicant fills and signs it?	14 days. 21 days. 2 months.	

Topic	Question Text	Answers	Image
General questions	What is the minimum age for leading cattle on a road?	15	 A 3D rendered scene depicting a rural setting. On the left, a person wearing a blue uniform and a red turban is riding a blue bicycle. In the center, a person in a blue shirt and light-colored pants is walking and leading a herd of black and white cows. The cows are walking on a paved path that runs alongside a building with vertical wooden siding. To the right of the path, there are patches of green grass and yellow daffodils. The background shows a grey wall with a white rectangular opening.

Topic	Question Text	Answers	Image
General questions	Are you allowed to overtake the car now?	Yes. No.	